


あわせていくつ ふえるといくつ⑧

No. \_\_\_\_\_



ねん くみ なまえ

◆ あわせると いくつですか。



① 1かいめ



2かいめ



$$2 + \square = \square$$

② 1かいめ



2かいめ



$$\square + \square = \square$$

③ 1かいめ



2かいめ



$$\square + \square = \square$$

④ 1かいめ

2かいめ



$$\square + \square = \square$$