

分数と小数⑦

No. 1

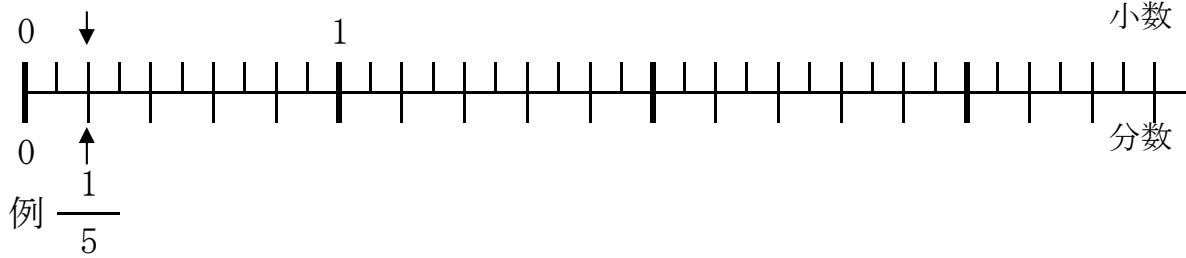
年 組 名前 _____

◆ 次の数を、例のように、下の数直線に表しましょう。

①

3	1.7	$\frac{3}{5}$	$2\frac{2}{5}$	0.8	$\frac{4}{2}$
---	-----	---------------	----------------	-----	---------------

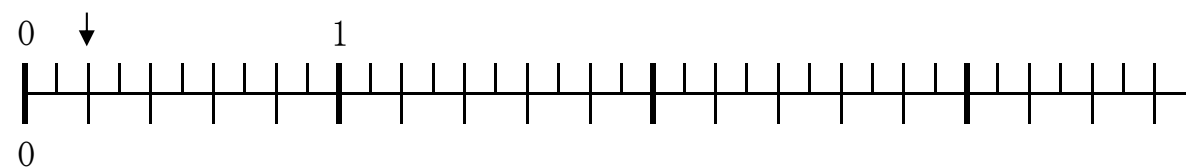
例 0.2



②

3.2	1.1	$\frac{6}{2}$	$1\frac{4}{5}$	2	$\frac{4}{5}$
-----	-----	---------------	----------------	---	---------------

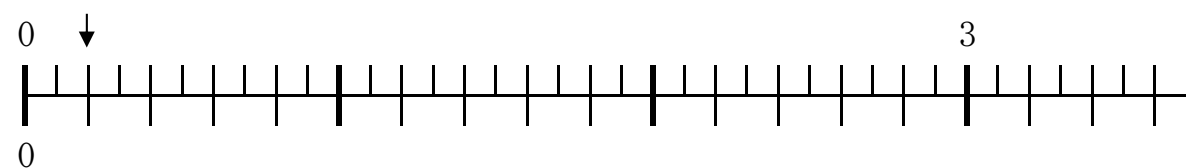
例 0.2



③

$2\frac{1}{5}$	0.6	$\frac{3}{3}$	3.3	1	$\frac{6}{5}$
----------------	-----	---------------	-----	---	---------------

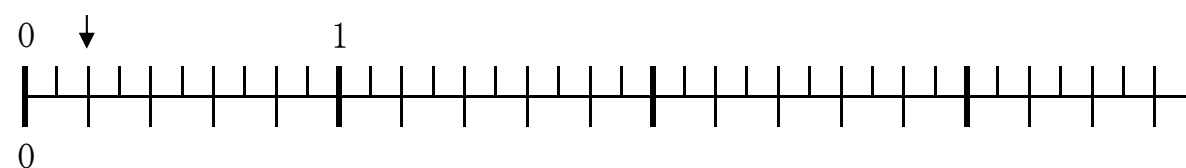
例 0.2



④

3.2	$\frac{13}{5}$	$\frac{12}{4}$	$3\frac{2}{5}$	1.3	$\frac{6}{3}$
-----	----------------	----------------	----------------	-----	---------------

例 0.2



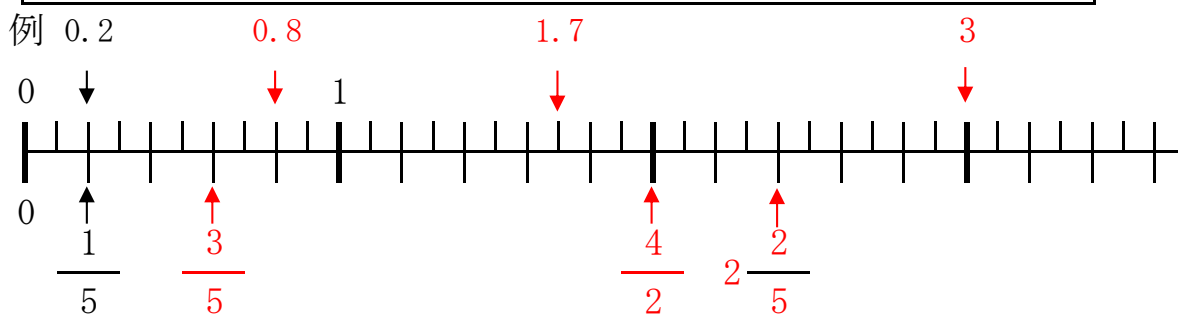
答え

名前 _____

◆ 次の数を、例のように、下の数直線に表しましょう。

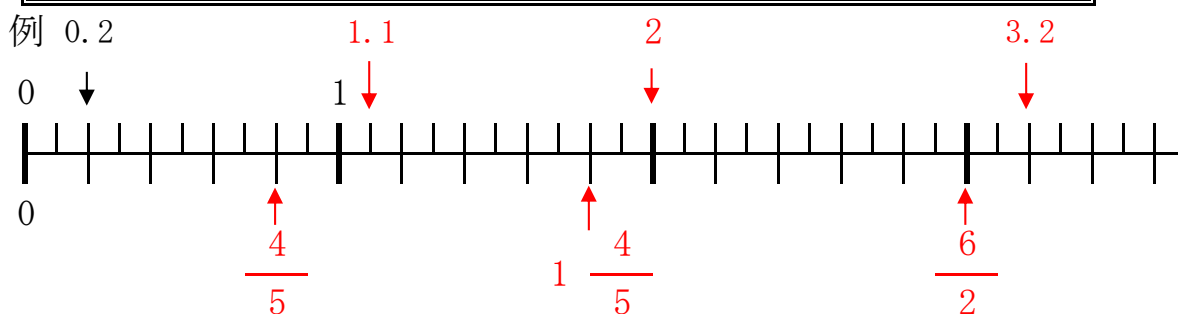
①

3	1.7	$\frac{3}{5}$	$2\frac{2}{5}$	0.8	$\frac{4}{2}$
---	-----	---------------	----------------	-----	---------------



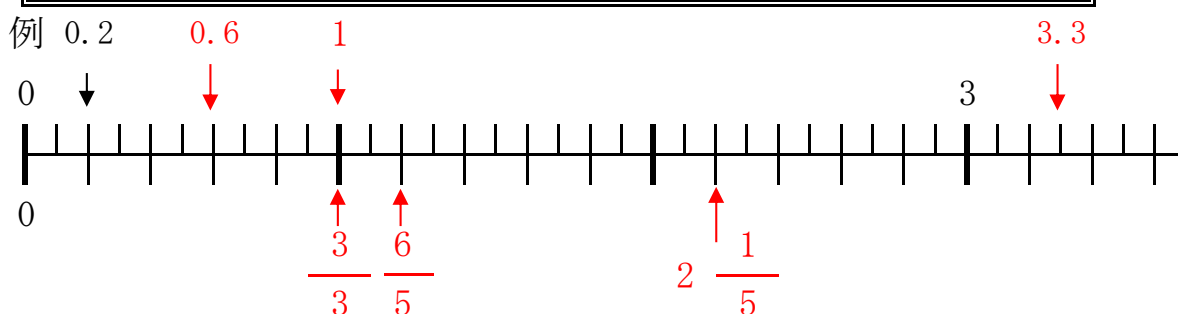
②

3.2	1.1	$\frac{6}{2}$	$1\frac{4}{5}$	2	$\frac{4}{5}$
-----	-----	---------------	----------------	---	---------------



③

$2\frac{1}{5}$	0.6	$\frac{3}{3}$	3.3	1	$\frac{6}{5}$
----------------	-----	---------------	-----	---	---------------



④

3.2	$\frac{13}{5}$	$\frac{12}{4}$	$3\frac{2}{5}$	1.3	$\frac{6}{3}$
-----	----------------	----------------	----------------	-----	---------------

