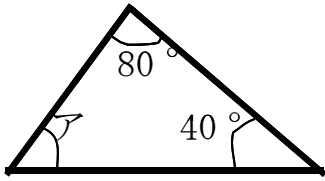


# 図形の角②

年 組 名前 \_\_\_\_\_

◆ア～カの角度は何度ですか。計算で求めましょう。

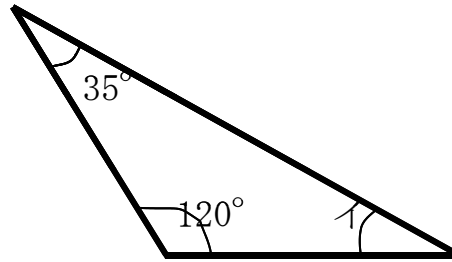
①



式

答え

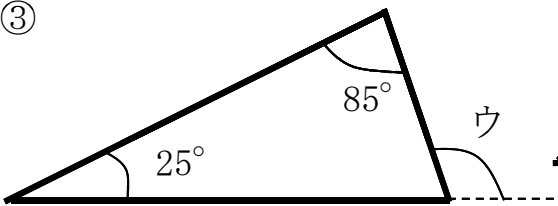
②



式

答え

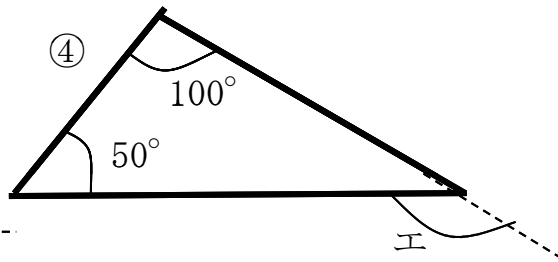
③



式

答え

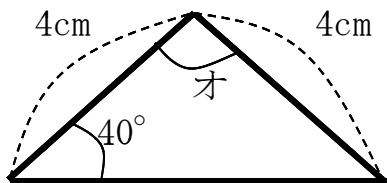
④



式

答え

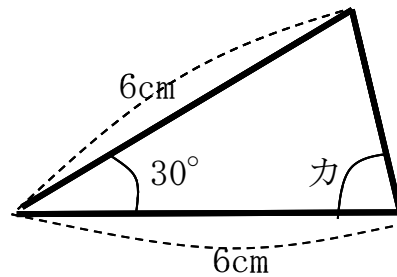
⑤



式

答え

⑥



式

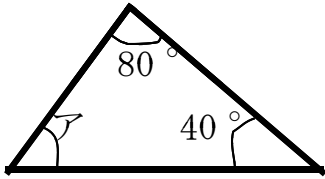
答え

# 図形の角②

## 答え

◆ア～カの角度は何度ですか。計算で求めましょう。

①



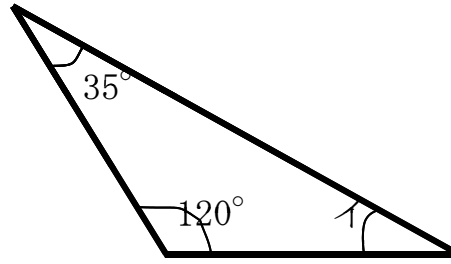
式

$$180 - (80 + 40) = 60$$

答え

60°

②



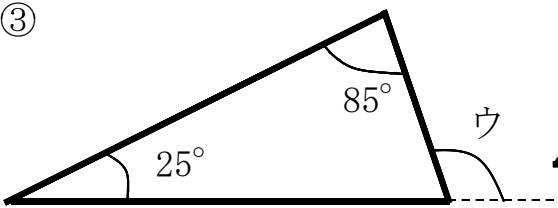
式

$$180 - (35 + 120) = 25$$

答え

25°

③



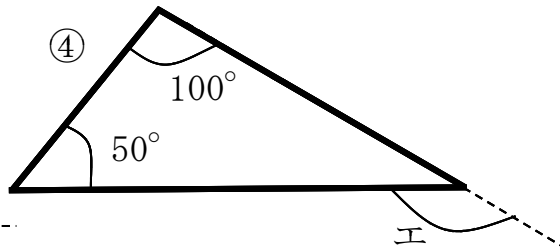
式  $180 - (85 + 25) = 70$

$$180 - 70 = 110$$

答え

110°

④



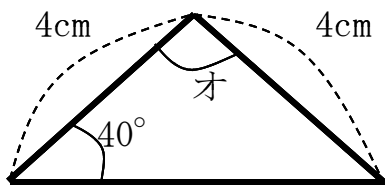
式  $180 - (100 + 50) = 30$

$$180 - 30 = 150$$

答え

150°

⑤



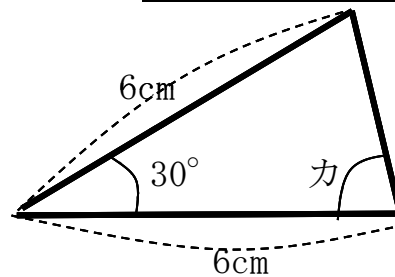
式  $40 \times 2 = 80$

$$180 - 80 = 100$$

答え

100°

⑥



式  $180 - 30 = 150$

$$150 \div 2 = 75$$

答え

75°