

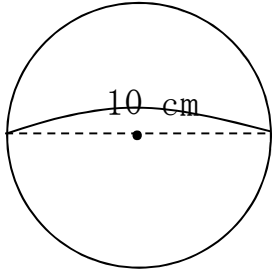
円周①

No. 1

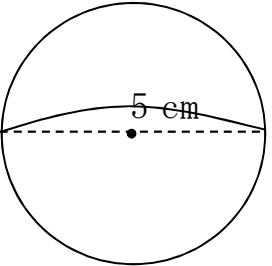
年 組 名前 _____

◆次の円の円周の長さを求めましょう。筆算は消さないこと。

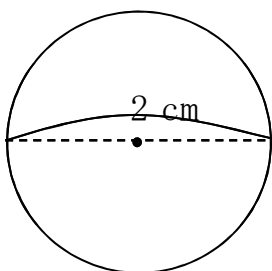
① 式



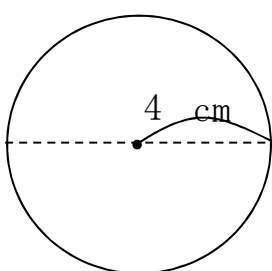
② 式



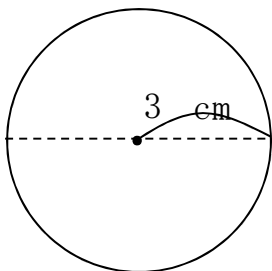
③ 式



④ 式



⑤ 式



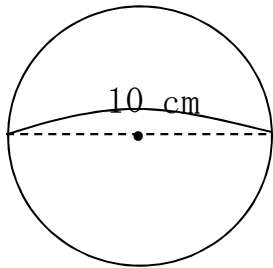
円周①
答え

No. 1

名前 _____

◆次の円の円周の長さを求めましょう。筆算は消さないこと。

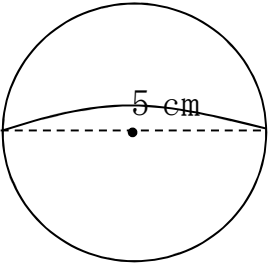
①



式 $10 \times 3.14 = 31.4$

31.4 cm

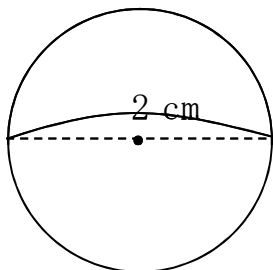
②



式 $5 \times 3.14 = 15.7$

15.7 cm

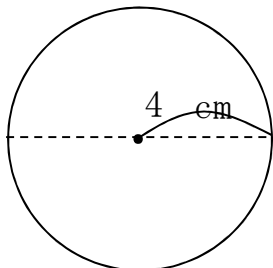
③



式 $2 \times 3.14 = 6.28$

6.28 cm

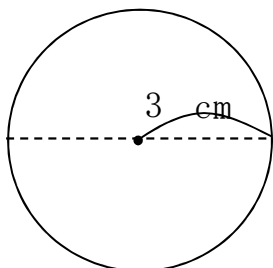
④



式 $4 \times 2 \times 3.14 = 25.12$

25.12 cm

⑤



式 $3 \times 2 \times 3.14 = 18.84$

18.84 cm